



INDIAN SCHOOL AL WADI AL KABIR

DEPARTMENT OF MATHEMATICS (2023 – 2024)


TOPIC: NUMBER CONCEPTS (0-30)


WORKSHEET-3

RESOURCE PERSON: MRS. HAMIN V




NAME: _____ CLASS: I SEC: _____ DATE: _____


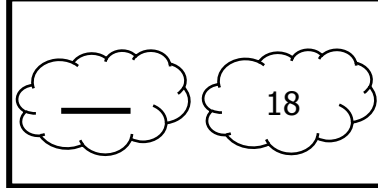

Q1. Write the missing numerals in each row.

a) 

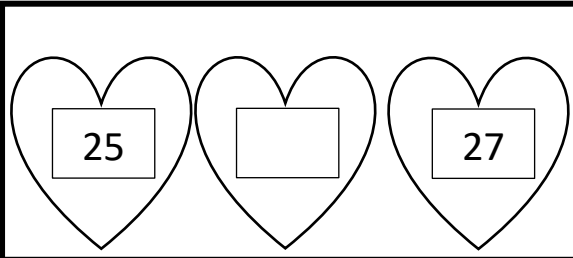
b) 

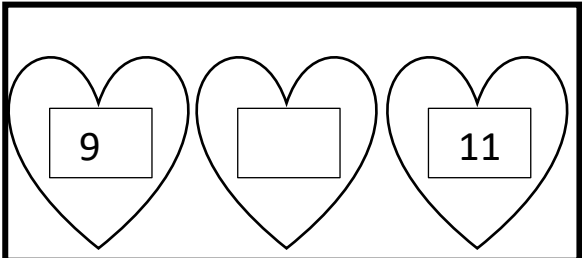
Q2. Write the number which comes before and after the given number.

a)  b)  c) 

d)  e)  f) 

Q3. Write the number between.

a) 

b) 

CHECKED BY: ACADEMIC COORDINATOR – CLASS - I

ISWK/DEPARTMENT OF MATHEMATICS /2023-2024

Q4. Compare the numbers and put the correct symbol/sign $>$, $<$ or $=$.

a)



29		26
----	--	----

b)



12		12
----	--	----

Q5. Colour the picture of the star with the greater number in yellow.

a)



 30	 12
--	--

b)



 22	 25
---	--

Q6. Colour the picture of the cloud with the smaller number in blue.

a)

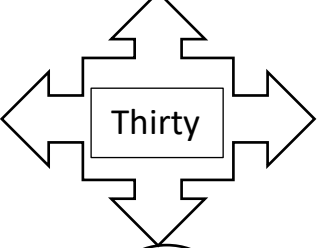



 19	 16
--	--

b)

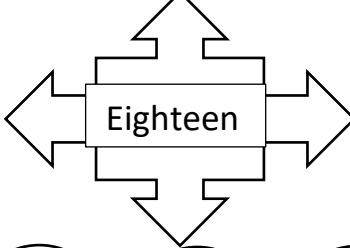



 24	 11
---	--

Q7. Read the number names given below and colour the matching numerals in red.

a)

 Thirty		
 29	 12	 30

b)

 Eighteen		
 16	 12	 18

Q8. Fill in the blanks.

1. 1 more than 12 is _____
2. 1 less than 10 is _____
3. One more than 29 is _____
4. One less than 17 is _____
5. 1 more than 22 is _____